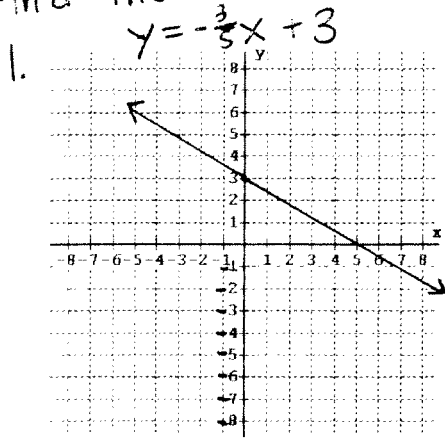
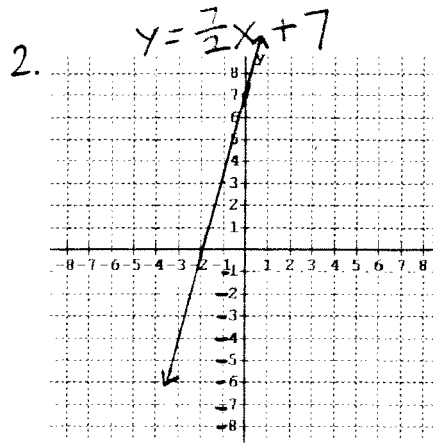


Find the X and Y intercepts

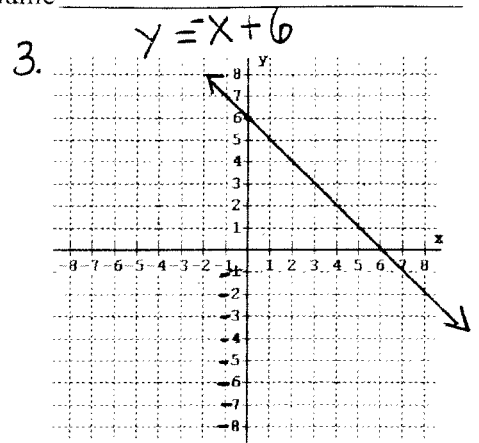
Name _____



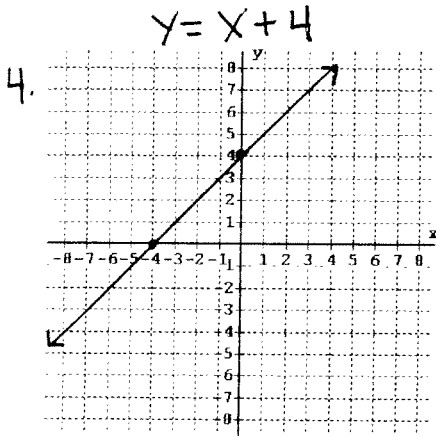
X-intercept: _____
Y-intercept: _____



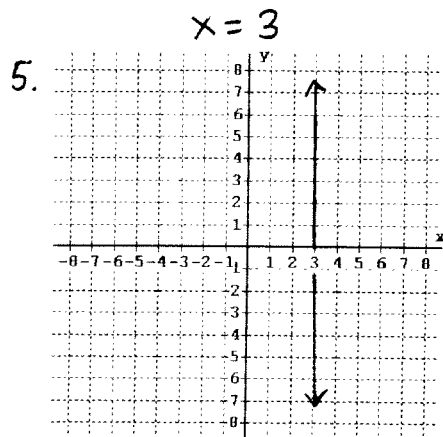
X-intercept: _____
Y-intercept: _____



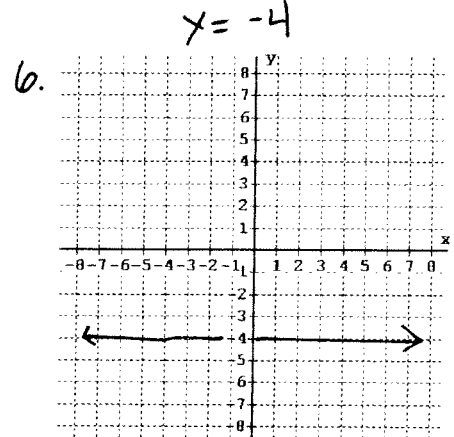
X-intercept: _____
Y-intercept: _____



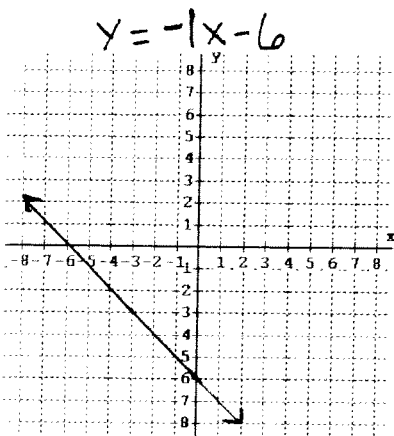
X-intercept: _____
Y-intercept: _____



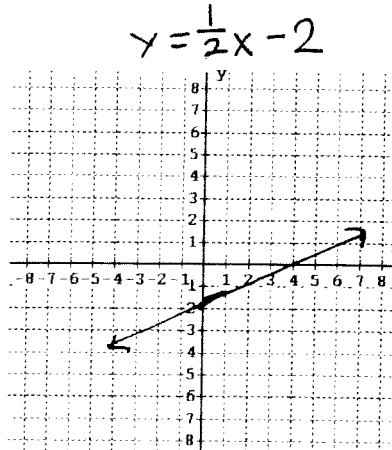
X-intercept: _____
Y-intercept: _____



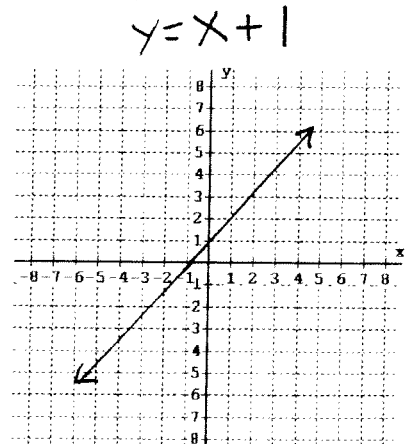
X-intercept: _____
Y-intercept: _____



X-intercept: _____
Y-intercept: _____



X-intercept: _____
Y-intercept: _____



X-intercept: _____
Y-intercept: _____

* Find the x-intercept and y-intercept for each.

Find the x-intercept by plugging in zero for y

Find the y-intercept by plugging in zero for x

1. $y = x + 1$

4. $y = 4x + 20$

2. $y = 2x - 2$

5. $y = \frac{1}{2}x + 6$

3. $y = x - 4$

6. $y = \frac{x}{4} - 2$